

Wednesday 15th April

1. Put the objects into equal groups.



- 2.




- 3.



4. *Why can't you put the strawberries into equal groups?*



5. *How many pencil pots are there?*
How many pencils are in each pot?



There are ____ groups of ____ pencils.

6. *How many vases are there?*
How many flowers are in each vase?



There are ____ groups of ____ flowers.

7. *Luke started drawing equal groups of 3 strawberries. Can you complete the drawing for him?*



How many strawberries are there altogether?

Thursday 16th April 2020

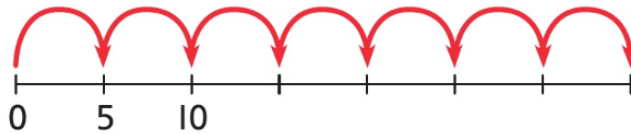
1. Luke bought 5 pairs of trainers.
How many trainers did he buy?




2. Lucy bought 3 bunches of flowers.
How many flowers did she buy?



3. There are 7 bunches of flowers.
How many flowers are there altogether?



4. There are 4 shoals of fish.
How many fish are swimming altogether?



5. There are 5 birds in each tree and 6 trees in a field.
How many birds are in the field?

